

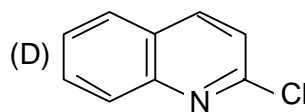
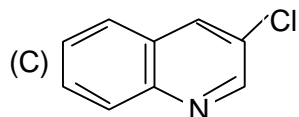
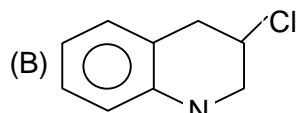
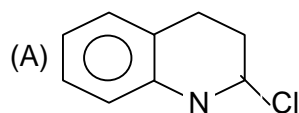
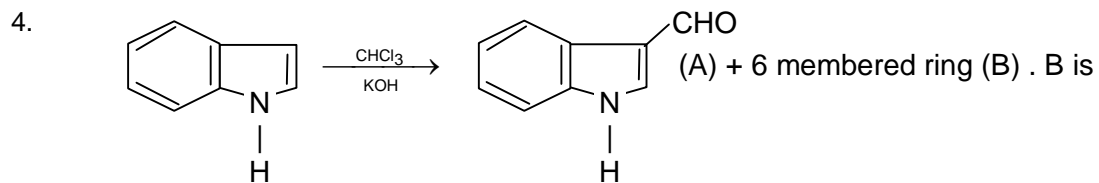
# Chemistry

## Straight Objective Type

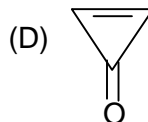
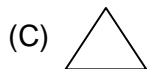
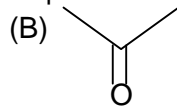
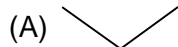
This section contains 30 multiple choice questions numbered 1 to 30. Each question has 4 choices (A), (B), (C) and (D), out of which **ONLY ONE** is correct.

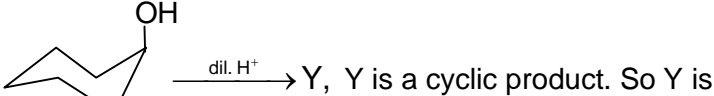
1. What is the correct decreasing order of enol content of the following compounds  
 (A)  $\text{C}_6\text{H}_5 - \overset{\text{O}}{\parallel}{\text{C}} - \text{CH}_2 - \overset{\text{O}}{\parallel}{\text{C}} - \text{C}_6\text{H}_5 > \text{CH}_3 - \overset{\text{O}}{\parallel}{\text{C}} - \text{CH}_2 - \overset{\text{O}}{\parallel}{\text{C}} - \text{H} > \text{CH}_3 - \overset{\text{O}}{\parallel}{\text{C}} - \text{CH}_2 - \overset{\text{O}}{\parallel}{\text{C}} - \text{OEt} > \text{CH}_3\text{CHO}$   
 (B)  $\text{CH}_3\text{CHO} > \text{CH}_3\text{COCH}_2\text{CO}_2\text{Et} > \text{CH}_3\text{COCH}_2\text{CHO} > \text{PhCOCH}_2\text{COPh}$   
 (C)  $\text{CH}_3\text{CHO} > \text{CH}_3\text{COCH}_2\text{CHO} > \text{PhCOCH}_2\text{COPh} > \text{CH}_3\text{COCH}_2\text{CO}_2\text{Et}$   
 (D) None
2. What is the correct increasing order of acidity of the following compounds?  
 (A)  $\text{CH}_3\text{NH}_2 > \text{C}_5\text{H}_5\text{N} > \text{CH}_3\text{CN}$  (B)  $\text{CH}_3\text{NH}_2 < \text{C}_5\text{H}_5\text{N} < \text{CH}_3\text{CN}$   
 (C)  $\text{CH}_3\text{NH}_2 < \text{CH}_3\text{CN} < \text{C}_5\text{H}_5\text{N}$  (D)  $\text{CH}_3\text{CN} < \text{CH}_3\text{NH}_2 < \text{C}_5\text{H}_5\text{N}$
3. Allyl isocyanide has  
 (A) 9  $\sigma$  bonds and 4  $\pi$  bonds  
 (B) 9  $\sigma$  bonds, 3  $\pi$  bonds and 2 non bonded electrons  
 (C) 8  $\sigma$  bonds and 5  $\pi$  bonds  
 (D) 8  $\sigma$  bonds, 3  $\pi$  bonds and 4 non bonded electrons.

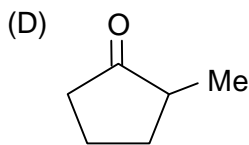
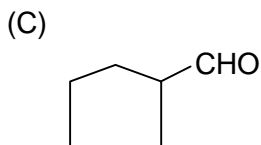
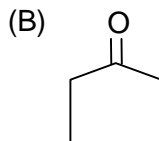
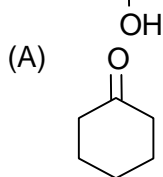
## Rough Work



5. Which of the following molecule having maximum dipole moment?

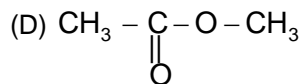
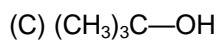
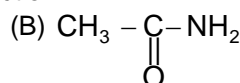
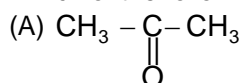


6.  Y, Y is a cyclic product. So Y is

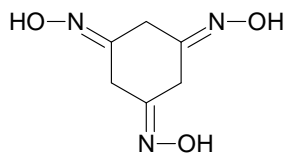


Rough Work

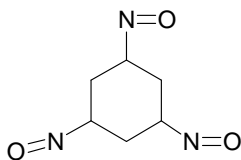
7. Which of the following will undergo haloform reaction?



8.



(I)



(II)

The correct statement about the compound(s) (I) and (II) are:

- (1) I shows geometrical isomerism  
 (2) II shows geometrical isomerism  
 (3) I and II are functional isomers  
 (4) I can show tautomerism

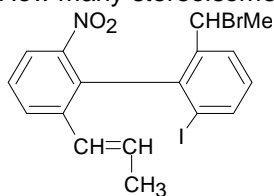
(A) 1 and 2

(B) 1, 2 and 3

(C) 2 and 4

(D) 1, 2, 3 and 4

9. How many stereoisomers are possible for the given compound



(A) 2

(B) 4

(C) 6

(D) 8

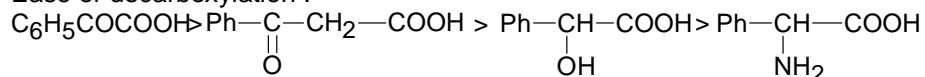
10. Which of the following order are correct?

I. Acidity order : o-nitrobenzoic acid > p-nitrobenzoic acid > m-nitrobenzoic acid

II. Basicity order :  $\text{NH}_2^- > \text{EtO}^- > \text{OH}^- > \text{RCOO}^- > \text{Cl}^-$

III. Heat of hydrogenation : cis-2-butene > trans-2-butene

IV. Ease of decarboxylation :



(A) I and II

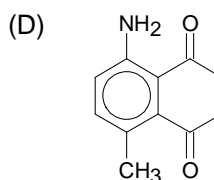
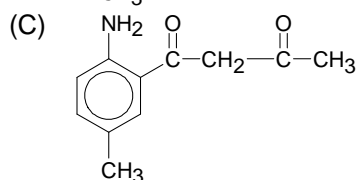
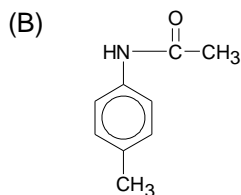
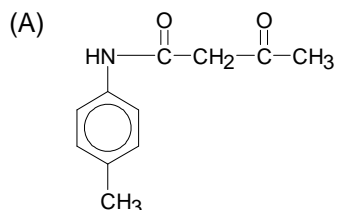
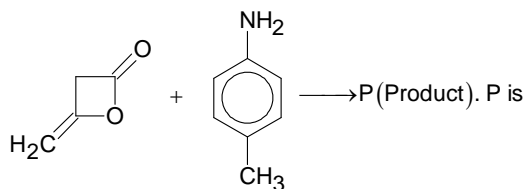
(B) I and III

(C) I and IV

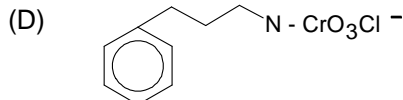
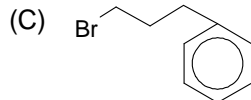
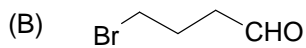
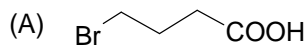
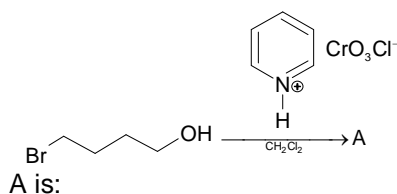
(D) I, II and III

Rough Work

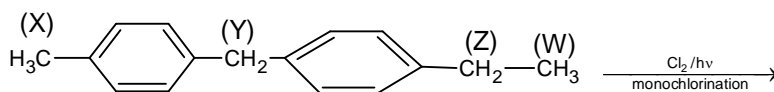
11.



12.



13.



Which of the following set of statements is correct?

- (i) The reactivity order of C – H bond is  $Y > Z > X > W$
- (ii) The max. no. of monochloro isomers possible is 4
- (iii) Monochloro isomers on fractional distillation will separate in 4 columns

(A) Only (ii) correct

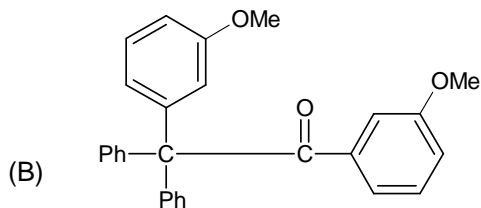
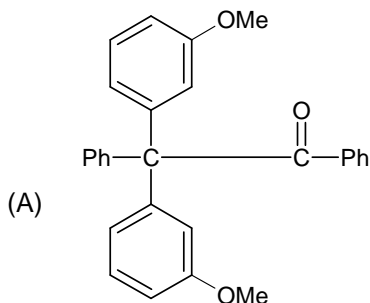
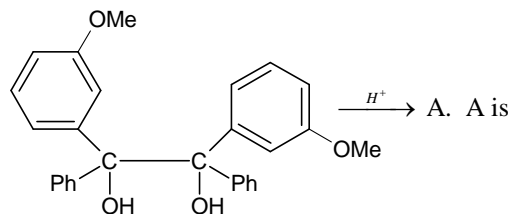
(B) (i) and (ii) correct

(C) (i) and (iii) correct

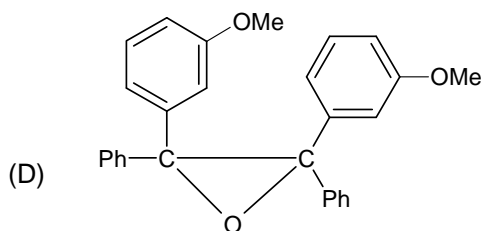
(D) All are correct

**Rough Work**

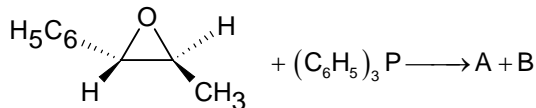
14.



(C) (A) is major and (B) is minor



15.



Which of the following set is correct for the above reaction

(I) the above reaction will yield the alkene as one of the product

(II) the above reaction will give both *cis* and *trans* isomers

(III) the above reaction will give *cis* isomer only

(IV) the above reaction will give *trans* isomer only

(A) (I), (II)

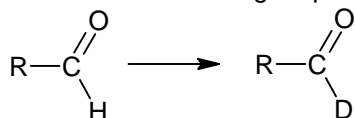
(B) (I), (III)

(C) (I), (IV)

(D) Only (II)

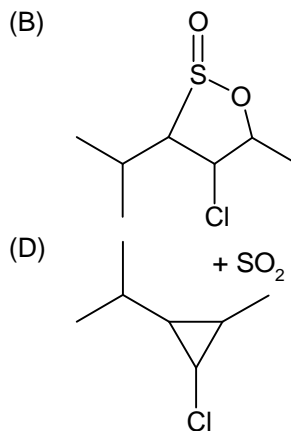
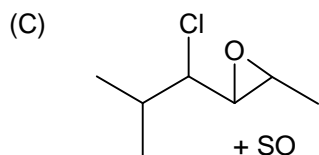
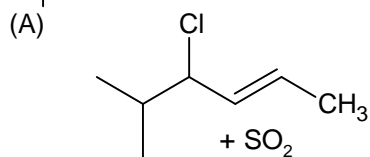
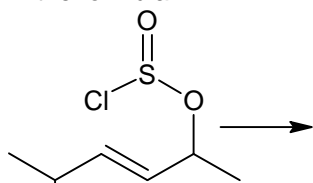
Rough Work

16. Which of the following sequence of reagents can be best utilized for the given transformation



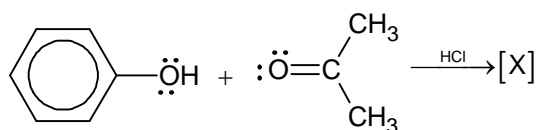
- (A)  $\text{Cl}_2, \text{AcOH}; \text{D}_2\text{O}; \text{LiAlH}_4/\text{H}_2\text{O}$   
 (B)  $\text{D}_2\text{O}/\text{D}_3\text{O}^+, \text{Cl}_2, \text{AcOH}; \text{NaBH}_4/\text{H}_2\text{O}$   
 (C)  $\begin{array}{l} \text{H}_2\text{C}-\text{SH} \\ | \\ \text{H}_2\text{C}-\text{SH} \end{array}, \text{base}; \text{D}_2\text{O}$  and then  $\text{HgCl}_2/\text{CdCO}_3 - \text{H}_2\text{O}$   
 (D)  $\begin{array}{l} \text{H}_2\text{C}-\text{SH} \\ | \\ \text{H}_2\text{C}-\text{SH} \end{array}$  Base;  $\text{HgCl}_2/\text{CdCO}_3 - \text{H}_2\text{O}$  and then  $\text{D}_2\text{O}$

17. Which of the following is the most likely product from the reaction illustrated by the curved arrows in the formula?



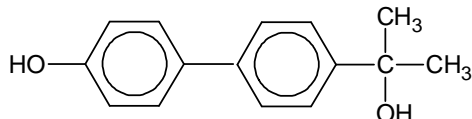
Rough Work

18.

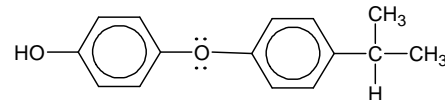


[X] is:

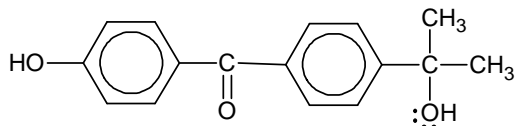
(A)



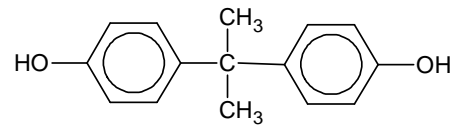
(B)



(C)



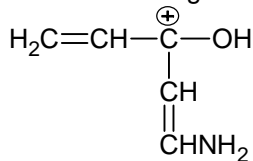
(D)



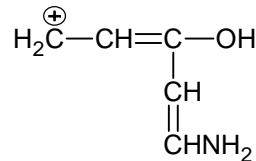
19.

Which of the following is the most stable resonance structure?

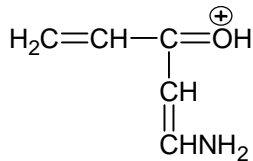
(A)



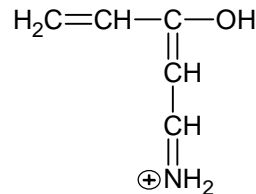
(B)



(C)



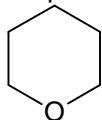
(D)



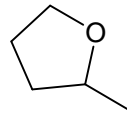
20.

A chiral  $\text{C}_5\text{H}_{10}\text{O}$  ether reacts with hot HI to give a  $\text{C}_5\text{H}_{10}\text{I}_2$  product. Treatment of this with hot KOH in ethanol produces 1,3-pentadiene. What is the structure of the original ether?

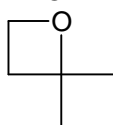
(A)



(B)



(C)

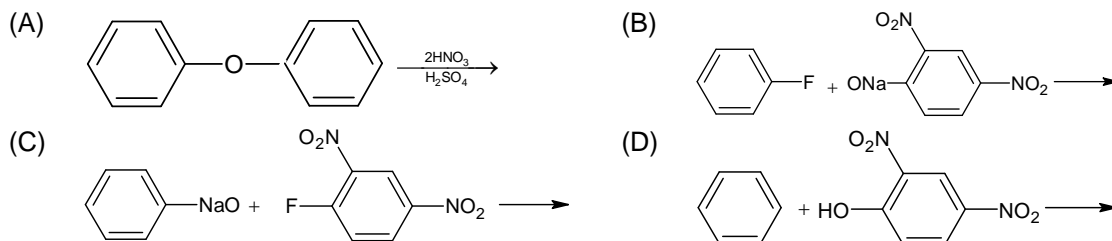
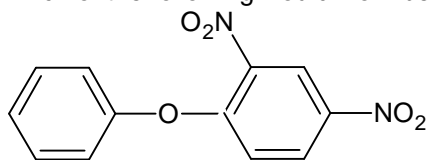


(D)

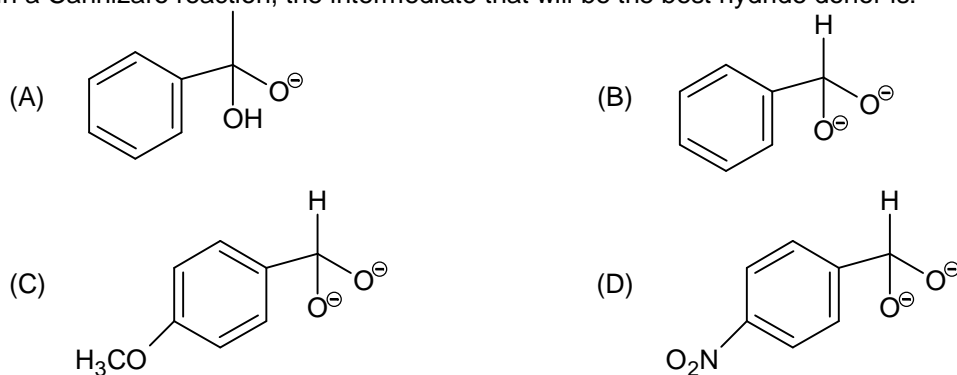


Rough Work

21. Which of the following would work best for the synthesis of the ether shown below?



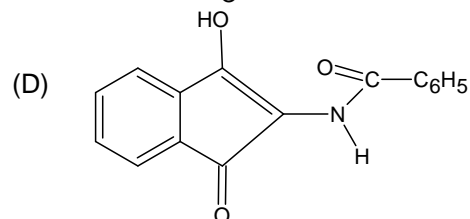
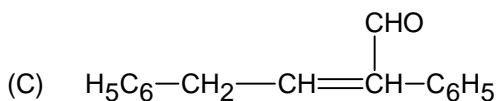
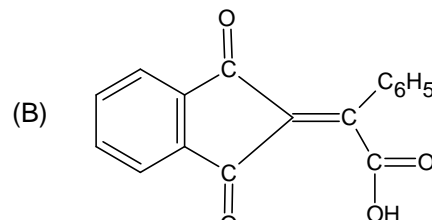
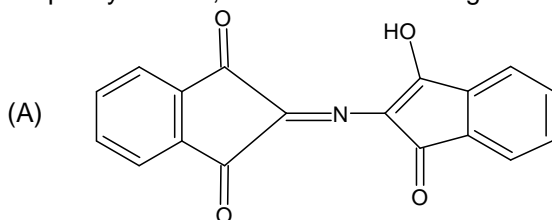
22. In a Cannizzaro reaction, the intermediate that will be the best hydride donor is:



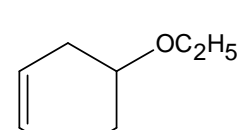
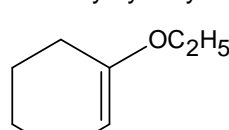
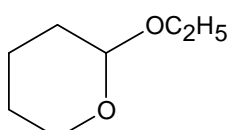
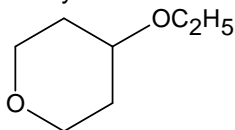
Rough Work



23. Ninhydrin reagent reacts with  $\alpha$ -amino acids to give purple colour. In the reaction of ninhydrin with phenylalanine, which of the following is responsible for this colour?



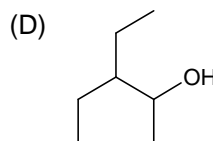
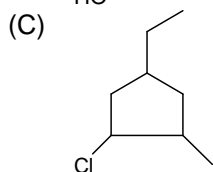
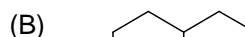
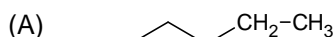
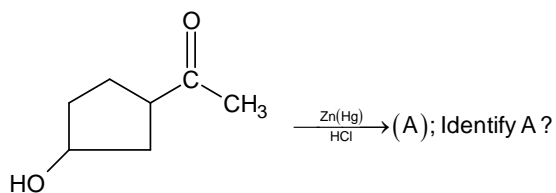
24. Formulas for four ethyl ethers are drawn below. Two are cleaved by aqueous acid much more easily than the other two. Which ethers are more easily hydrolysed?



- (A) I and II  
(C) III and IV

- (B) II and III  
(D) I and IV

- 25.



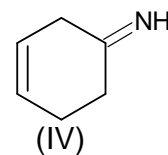
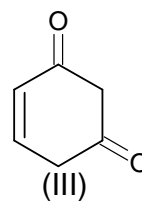
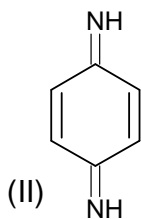
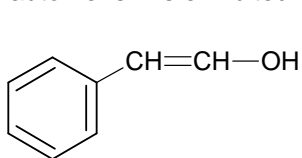
Rough Work

26. Glycerol on oxidation with Fenton's reagent ( $\text{H}_2\text{O} + \text{FeSO}_4$ ) gives:  
 (A) Glyceraldehyde (B) Dihydroxy acetone  
 (C) Tartaric acid (D) Glyceraldehyde and dihydroxy acetone
27. Aniline when treated with  $\text{NaNO}_2$  and  $\text{HCl}$  at  $0^\circ\text{C}$  gives  
 (A) phenol (B) nitrobenzene  
 (C) benzene diazonium chloride (D) benzyl alcohol
28. An ether (A)  $\text{C}_6\text{H}_{14}\text{O}$  when heated with excess of hot conc.  $\text{HI}$  produced two alkyl halides which on hydrolysis form compounds (B) and (C). Oxidation of (B) gave an acid (D) whereas oxidation of (C) gave a ketone (E). What are structural formula of (A), (B) and (C) respectively?
- (A)  $\text{H}_5\text{C}_2-\text{O}-\underset{\text{CH}_3}{\text{CH}}-\text{CH}_2-\text{CH}_3$ ,  $\text{CH}_3\text{CH}_2\text{OH}$        $\text{H}_3\text{C}-\underset{\text{OH}}{\text{CH}}-\text{C}_2\text{H}_5$
- (B)  $\text{C}_2\text{H}_5\text{OCH}_2\text{C}_3\text{H}_7$ ,  $\text{C}_2\text{H}_5\text{OH}$ ,  $\text{OHC}-\text{CH}_2\text{CH}_2\text{CH}_3$
- (C)  $\text{H}_3\text{C}-\text{CH}_2-\text{CH}_2-\text{O}-\underset{\text{CH}_3}{\text{CH}}-\text{CH}_3$ ,  $\text{HO}-\underset{\text{CH}_3}{\text{CH}}-\text{CH}_3$ ,  $\text{CH}_3\text{CH}_2\text{CH}_2\text{OH}$
- (D)  $\text{H}_3\text{C}-\underset{\text{CH}_3}{\text{CH}}-\text{O}-\text{CH}_2-\underset{\text{CH}_3}{\text{CH}}-\text{CH}_3$ ,  $\text{H}_3\text{C}-\underset{\text{CH}_3}{\text{CH}}-\text{OH}$ ,  $\text{CH}_3\text{CH}_2\text{CH}_2\text{OH}$

---

**Rough Work**

29. Tautomerism is exhibited by



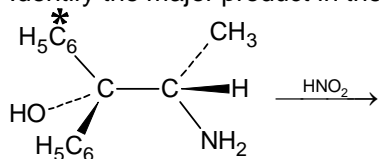
(A) (I) and (III)

(C) (I), (III) and (IV)

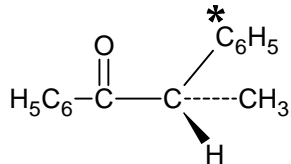
(B) (I), (II) and (IV)

(D) (IV) only

30. Identify the major product in the following reaction

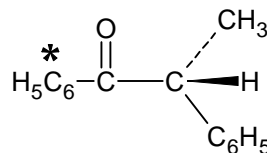


(A)

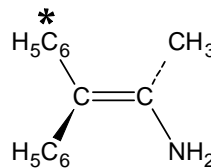


(C) A and B in equal concentrations

(B)



(D)



Rough Work